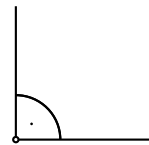
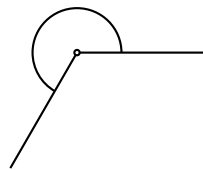
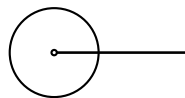
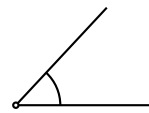
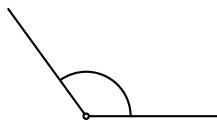


1. Wie heissen die griechischen Kleinbuchstaben? Schreibe jedes Zeichen zehnmal.

Buchstabe	Name	schreibe selber									
α											
β											
γ											
δ											
ε											
ζ											
η											
ϑ											
ι											
κ											
λ											
μ											
ν											
ξ											
\omicron											
π											
ρ											
σ											
τ											
υ											
φ											
χ											
ψ											
ω											

2. Um welche Art von Winkel handelt es sich?



3. Um welche Art von Winkel handelt es sich?

(a) $\alpha = 359^\circ$

(b) $\beta = 63^\circ$

(c) $\gamma = 180^\circ$

(d) $\delta = 299^\circ$

(e) $\varepsilon = 90.1^\circ$

(f) $\zeta = 360^\circ$

(g) $\eta = 45^\circ$

(h) $\vartheta = 120^\circ$

(i) $\iota = 2.5^\circ$