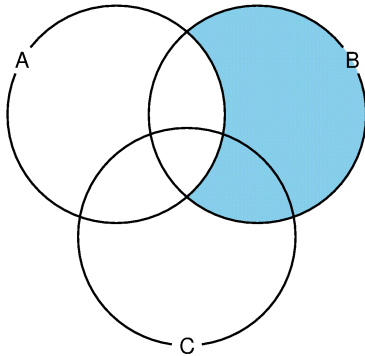
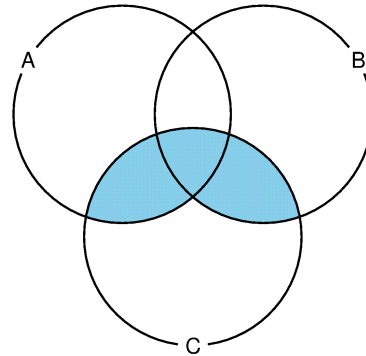


Schraffiere im Mengendiagramm die Menge, die zum Mengenausdruck gehört. Wenn Klammern fehlen, sind die Ausdrücke von links nach rechts auszuwerten.

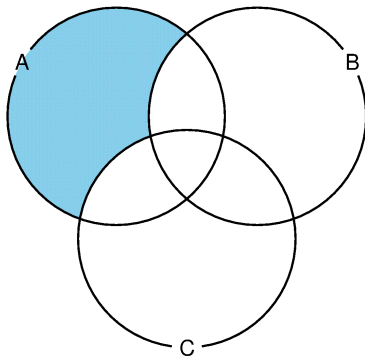
1. $B \setminus A$



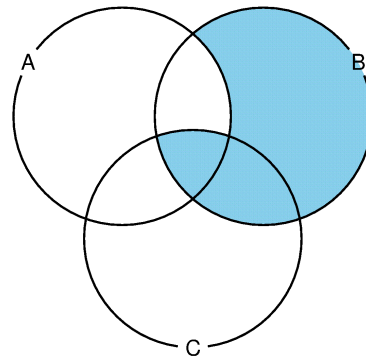
5. $(B \cap C) \cup (C \cap A)$



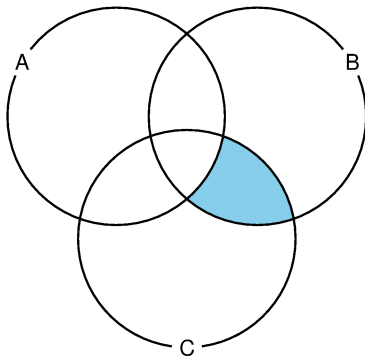
2. $A \setminus (B \cup C)$



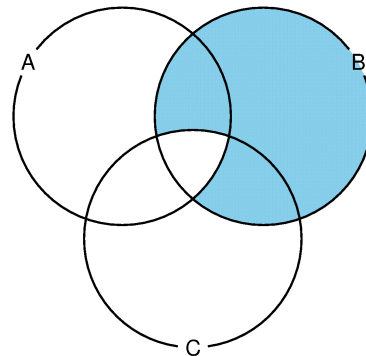
6. $(B \setminus A) \cup (B \cap C)$



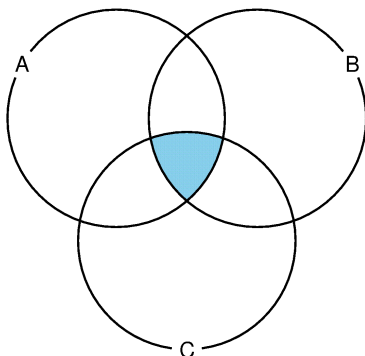
3. $(B \cap C) \setminus A$



7. $B \setminus (C \cap A)$



4. $(A \cap B) \cap C$



8. $(C \setminus B) \cup (A \setminus B)$

