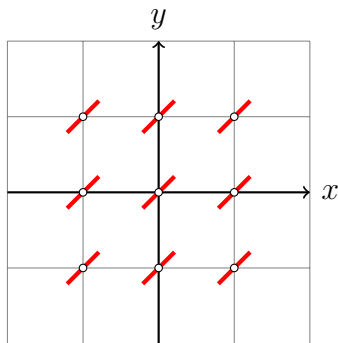


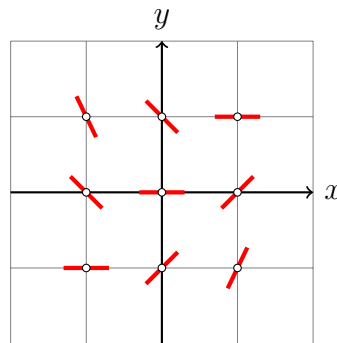
Aufgabe 3.1

$$y' = 1$$



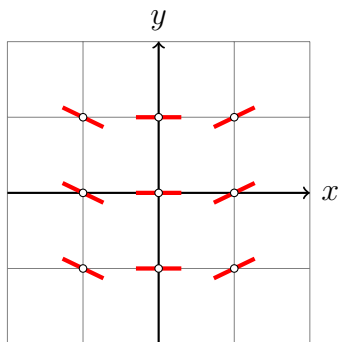
Aufgabe 3.4

$$y' = x - y$$



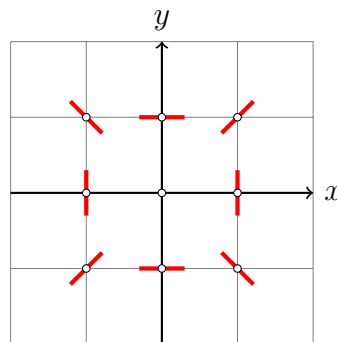
Aufgabe 3.2

$$2y' = x$$



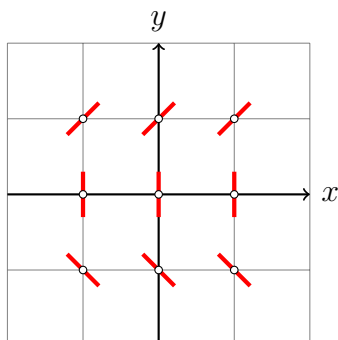
Aufgabe 3.5

$$y' = x/y$$



Aufgabe 3.3

$$y' \cdot y = 1$$



Aufgabe 3.6

$$y' = |y - x|$$

